






### Zadanie 1

Oszacuj wynik, a następnie oblicz pisemnie. Odejmowanie sprawdź za pomocą dodawania.

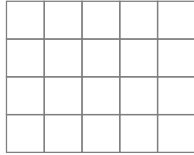
a)  $2938 + 615 =$  \_\_\_\_\_

Szacowanie: \_\_\_\_\_

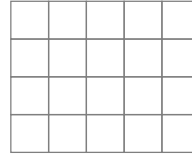


b)  $798 - 149 =$  \_\_\_\_\_

Szacowanie: \_\_\_\_\_




Spr.

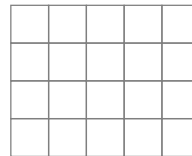


c)  $5640 - 983 =$  \_\_\_\_\_

Szacowanie: \_\_\_\_\_



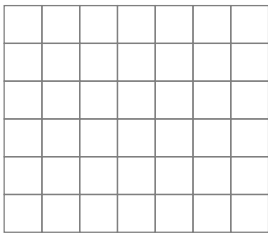
Spr.




### Zadanie 2

Oblicz pisemnie.

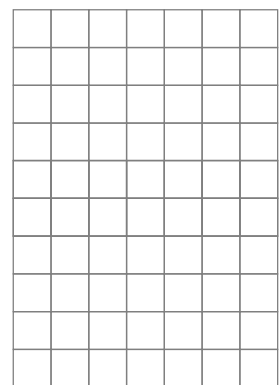
a)  $456 \cdot 7 =$  \_\_\_\_\_




c)  $1234 \cdot 608 =$  \_\_\_\_\_




e)  $572 : 4 =$  \_\_\_\_\_



b)  $592 \cdot 25 =$  \_\_\_\_\_



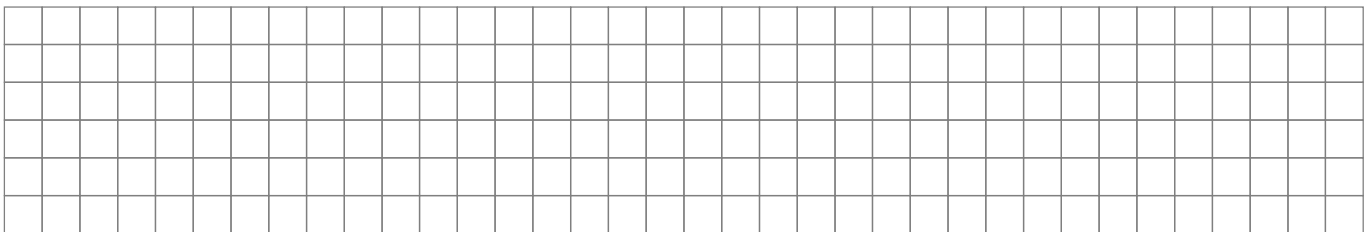
d)  $72600 \cdot 230 =$  \_\_\_\_\_



### Zadanie 3

Z domu do najbliższego sklepu Marek ma 1600 m, a z domu do szkoły o 750 m dalej niż do sklepu.

Ile metrów Marek ma do szkoły?



Odp. \_\_\_\_\_

